


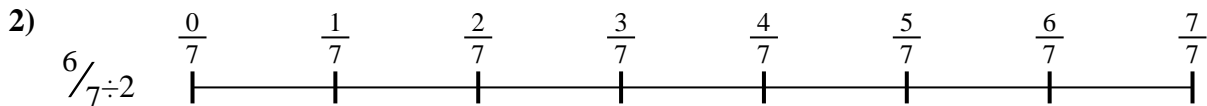


Use the numberline to solve each problem. The first is marked for you.

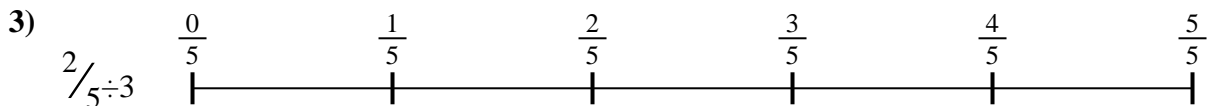
**Answers**




1. \_\_\_\_\_




2. \_\_\_\_\_



3. \_\_\_\_\_



4. \_\_\_\_\_



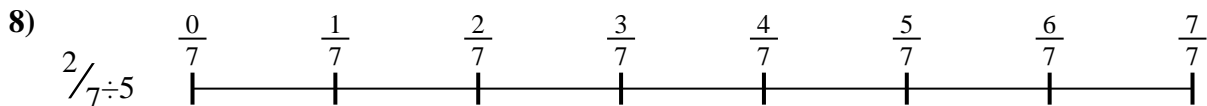
5. \_\_\_\_\_



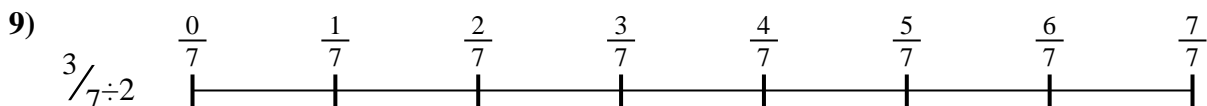
6. \_\_\_\_\_



7. \_\_\_\_\_



8. \_\_\_\_\_

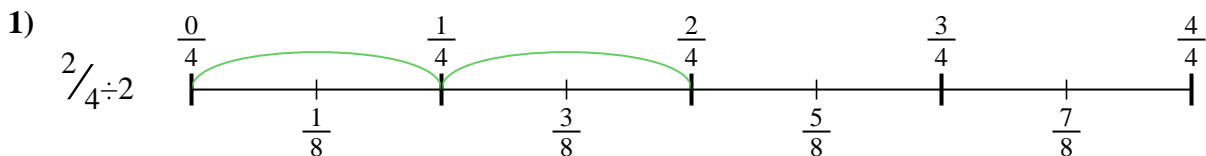


9. \_\_\_\_\_

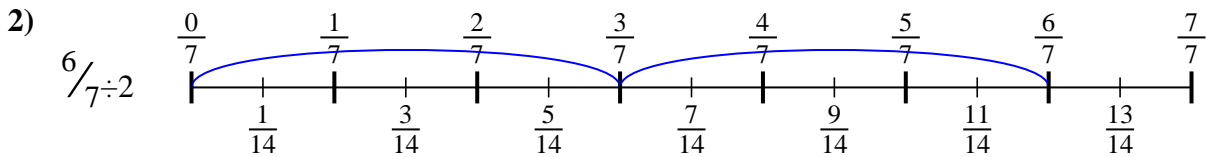


Use the numberline to solve each problem. The first is marked for you.

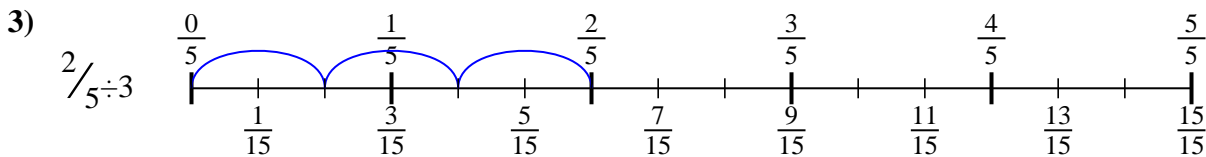
**Answers**



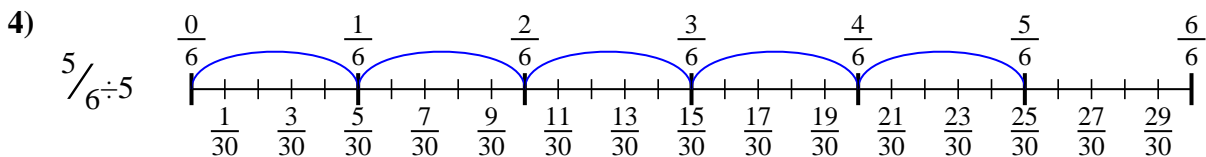
1.  $\frac{2}{8}$



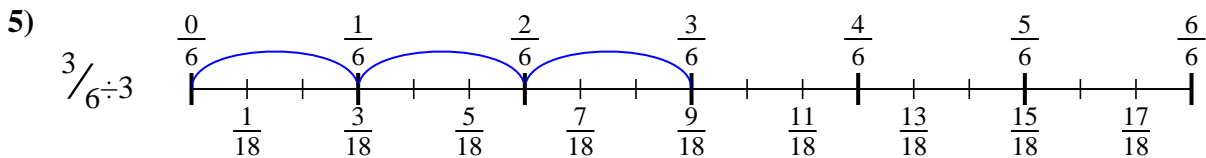
2.  $\frac{6}{14}$



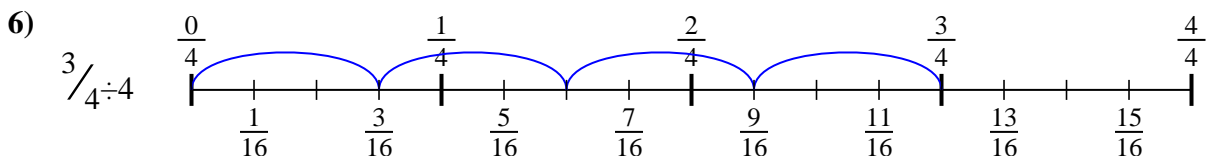
3.  $\frac{2}{15}$



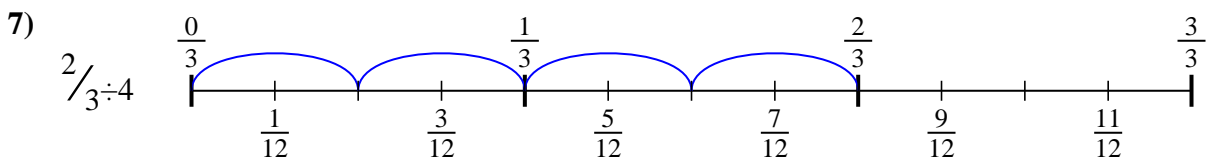
4.  $\frac{5}{30}$



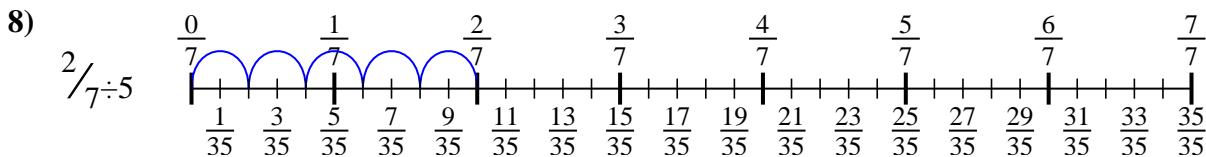
5.  $\frac{3}{18}$



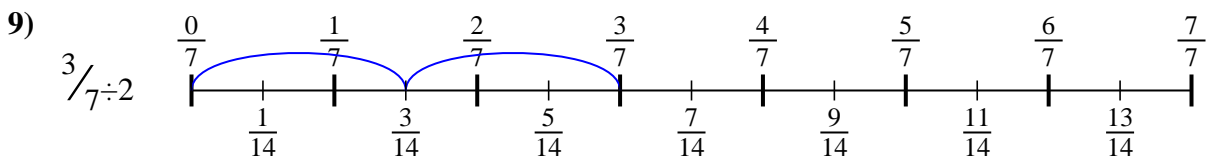
6.  $\frac{3}{16}$



7.  $\frac{2}{12}$



8.  $\frac{2}{35}$



9.  $\frac{3}{14}$



Use the numberline to solve each problem. The first is marked for you.

**Answers**

$2/15$

$2/8$

$2/35$

$5/30$

$2/12$

$3/18$

$6/14$

$3/14$

$3/16$

1. \_\_\_\_\_

2. \_\_\_\_\_

3. \_\_\_\_\_

4. \_\_\_\_\_

5. \_\_\_\_\_

6. \_\_\_\_\_

7. \_\_\_\_\_

8. \_\_\_\_\_

9. \_\_\_\_\_

1)

2)

3)

4)

5)

6)

7)

8)

9)